
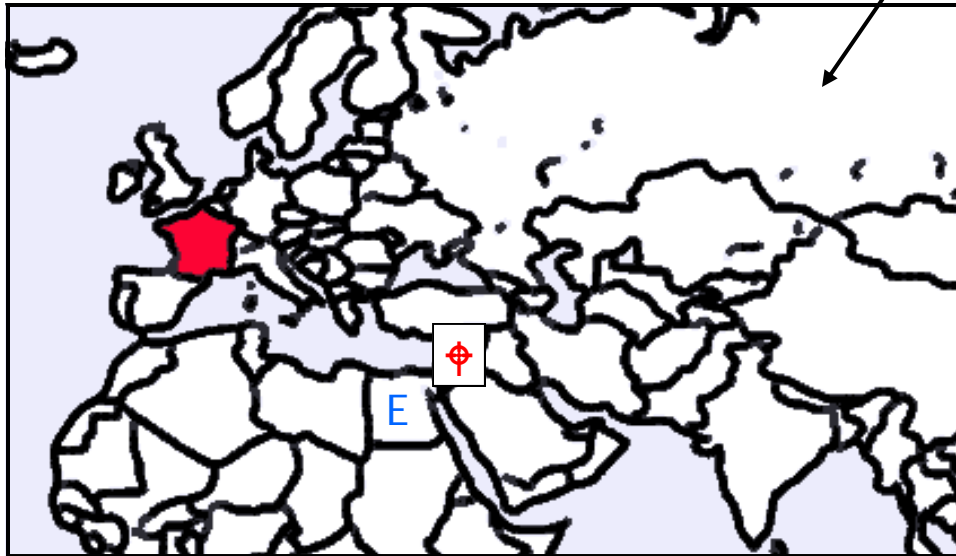
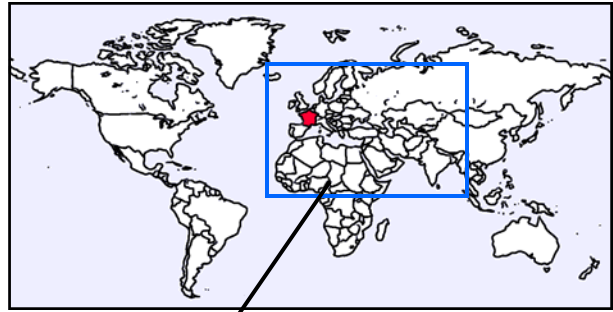


Middle Ages Traveler

You are living in **France** during the Middle Ages, and you want to do some traveling. Use the maps to help you find the answers to the questions below. Circle the correct answer.



NOTE: These maps show modern national boundaries. Middle Age countries were still changing a LOT!

1. In which direction would you travel to set sail on the Atlantic Ocean?
north south east west
2. In which direction would you travel to get to the Mediterranean Sea?
north south east west
3. What island country is to the north of France?
Australia Japan England Greenland
4. In which direction would you travel if you went on a Crusade (red cross)?
northeast southwest southeast northwest
5. From the Crusades, in which direction would you travel to visit Egypt (blue E)?
northeast southwest southeast northwest



Middle Ages Traveler



Here is a close-up map of **France** in the Middle Ages.

Use this map to help you complete the activities below.

Paris is the capital city, shown as a star on the map. Write the name **Paris** to the northwest of the map, out where the English Channel would be on a larger map. Draw a line pointing to the star.

You travel closer to the English Channel by going northwest from Paris. This city is **Rouen**. Circle Rouen in **blue**.

From Rouen, you travel southwest to a city near the Bay of Biscay. This city is **Nantes**. Circle Nantes in **green**.

Next you visit a city not far to the south of Paris. This is the city of **Orleans**. Circle Orleans in **red**.

Finally, you are ready to go on your Crusade. You will set sail from the city of **Montpellier**, far to the south in France along the Mediterranean Sea. Find Montpellier - a little circle almost hidden along the southeast coast of France, and almost directly east of Toulouse. Your ship is waiting! Circle Montpellier with your pencil.

Use the map above and those on the previous page to help you find and circle the correct answers to these questions.

1. Toulouse is mostly to which direction of the capital city of Paris?

north south east

2. Rheims is in which part of France?

northwest northeast

3. Which city is closer to Africa?

Toulouse Paris

4. Which city is closer to an ocean?

Nantes Rheims


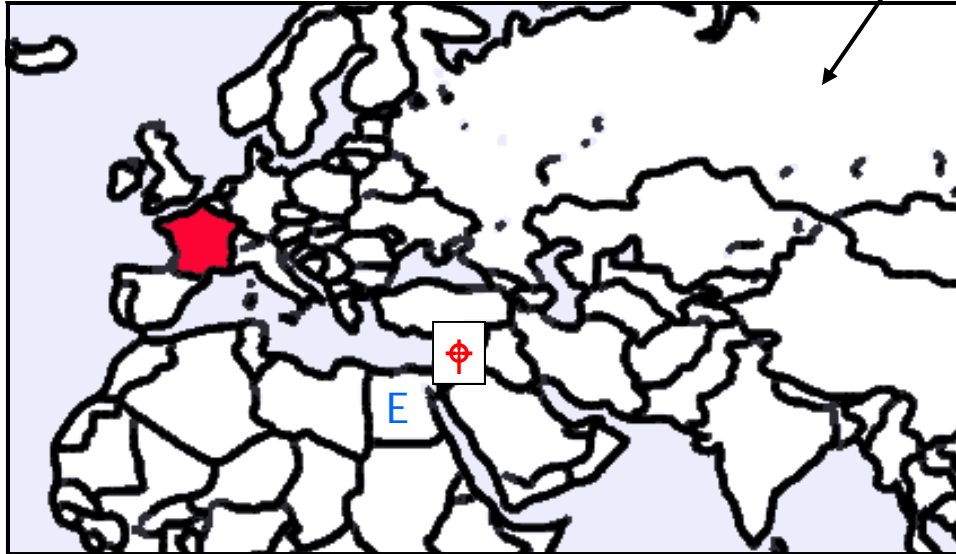
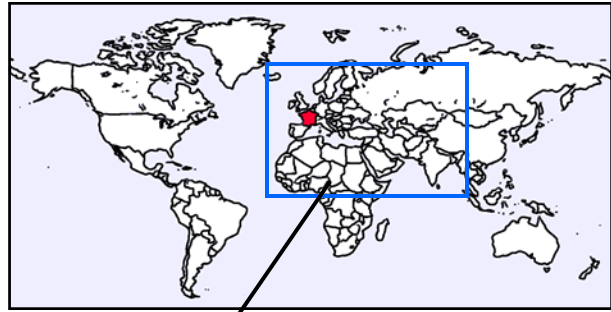
5. From Rheims, which direction is England?

north northeast northwest



Middle Ages Traveler **KEY**

You are living in **France** during the Middle Ages, and you want to do some traveling.
Use the maps to help you find the answers to the questions below.
Circle the correct answer.

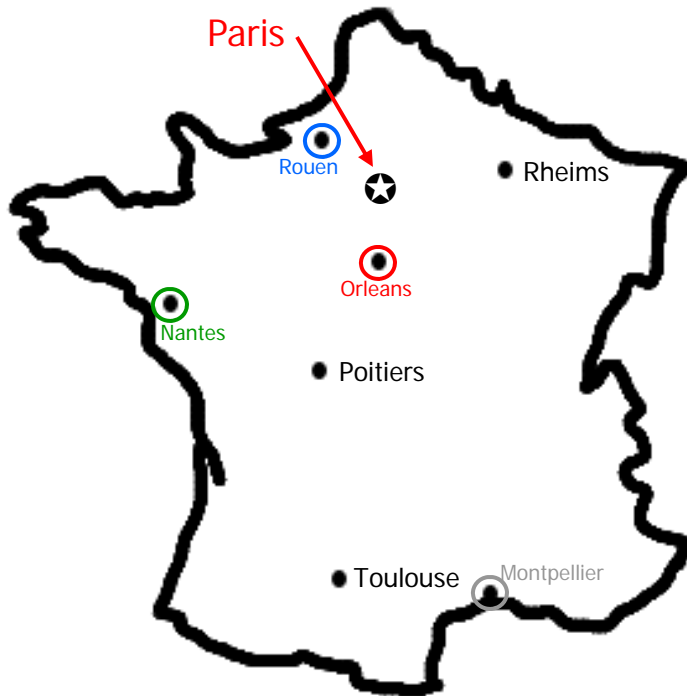


NOTE: These maps show modern national boundaries. Middle Age countries were still changing a LOT!

1. In which direction would you travel to set sail on the Atlantic Ocean?
north south east **west**
2. In which direction would you travel to get to the Mediterranean Sea?
north **south** east west
3. What island country is to the north of France?
Australia Japan **England** Greenland
4. In which direction would you travel if you went on a Crusade (red cross)?
northeast southwest **southeast** northwest
5. From the Crusades, in which direction would you travel to visit Egypt (blue E)?
northeast **southwest** southeast northwest



Middle Ages Traveler **KEY**



Here is a close-up map of **France** in the Middle Ages. Use this map to help you complete the activities below.

Paris is the capital city, shown as a star on the map. Write the name **Paris** to the northwest of the map, out where the English Channel would be on a larger map. Draw a line pointing to the star.

You travel closer to the English Channel by going northwest from Paris. This city is **Rouen**. Circle Rouen in **blue**.

From Rouen, you travel southwest to a city near the Bay of Biscay. This city is **Nantes**. Circle Nantes in **green**.

Next you visit a city not far to the south of Paris. This is the city of **Orleans**. Circle Orleans in **red**.

Finally, you are ready to go on your Crusade. You will set sail from the city of **Montpellier**, far to the south in France along the Mediterranean Sea. Find Montpellier - a little circle almost hidden along the southeast coast of France, and almost directly east of Toulouse. Your ship is waiting! Circle Montpellier with your pencil.

Use the map above and those on the previous page to help you find and circle the correct answers to these questions.

1. Toulouse is mostly to which direction of the capital city of Paris?

north **south** east

2. Rheims is in which part of France?

northwest **northeast**

3. Which city is closer to Africa?

Toulouse Paris

4. Which city is closer to an ocean?

Nantes Rheims

5. From Rheims, which direction is England?

north northeast **northwest**

