



Dog Puzzles


Count the number of rows across and down, then multiply to find how many pieces total.



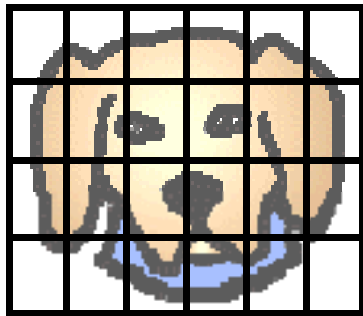
$$\underline{4} \times \underline{4} = \underline{16}$$



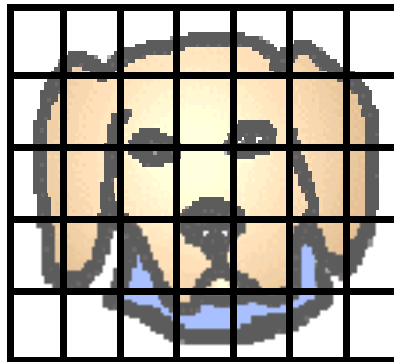
$$\underline{\quad} \times \underline{\quad} = \underline{\quad}$$



$$\underline{\quad} \times \underline{\quad} = \underline{\quad}$$



$$\underline{\quad} \times \underline{\quad} = \underline{\quad}$$



$$\underline{\quad} \times \underline{\quad} = \underline{\quad}$$



$$\underline{\quad} \times \underline{\quad} = \underline{\quad}$$

Multiply using some of the number facts above to help you.

$$\begin{array}{r} 614 \\ \times 4 \\ \hline \end{array}$$

$$\begin{array}{r} 560 \\ \times 7 \\ \hline \end{array}$$

$$\begin{array}{r} 753 \\ \times 5 \\ \hline \end{array}$$

$$\begin{array}{r} 377 \\ \times 6 \\ \hline \end{array}$$

$$\begin{array}{r} 652 \\ \times 3 \\ \hline \end{array}$$