



Count 'Em Out


How many puppies will be left? Count each group, then cross out the given number.




$$\square - 4 = \square$$




$$\square - 3 = \square$$




$$\square - 6 = \square$$



$$\square - 4 = \square$$



$$\square - 5 = \square$$



$$\square - 6 = \square$$